



THIRD SPACE
LEARNING

Mathematics

Paper 3














(Calculator)

Foundation Tier

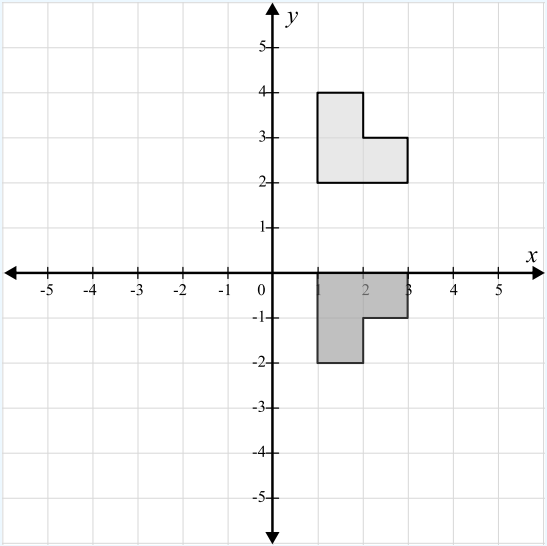
Mark Scheme

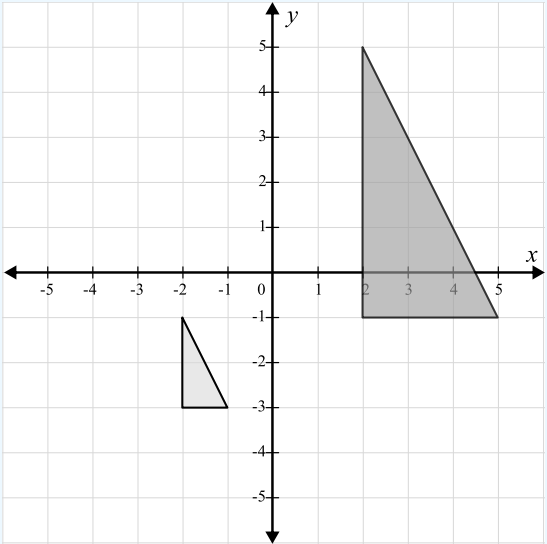
Edexcel GCSE

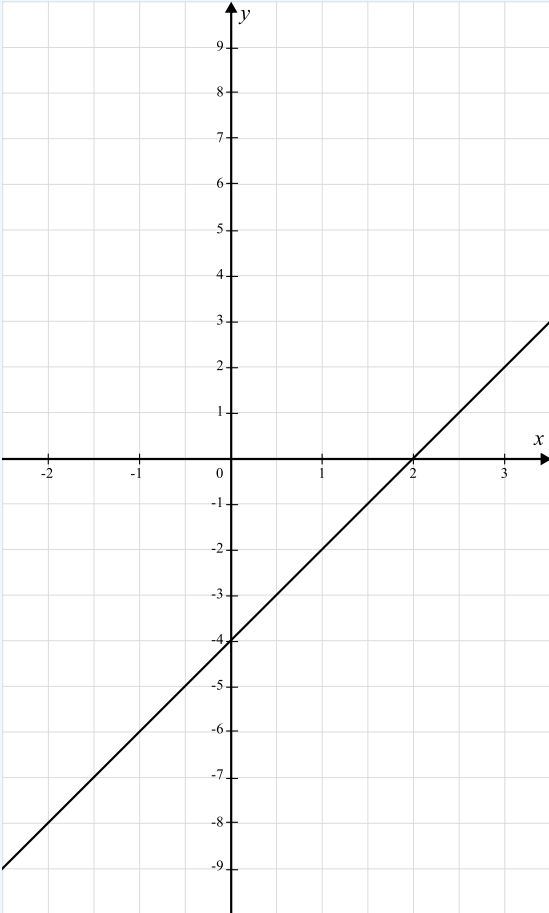
SET 5

Question	Working	Answer	Notes								
Q1		0.3 or 3 tenths									
Q2		Any 2 of 1, 3, 7 and 21									
Q3		0.62									
Q4		11.50am									
Q5a		25cm ²									
Q5b	Perimeter = 24cm	Any rectangle with a perimeter of 24cm	M1 P = 24cm or $l + w = 12$ or $2l + 2w = 24$ A1 Any correct rectangle								
Q6	$5.2 \times 80 = 416$ $3.5 \times 80 = 280$	Length 416cm Width 280cm	M1 Correctly measures length or width A1 Multiplies their values by 80 A1 Width correct								
Q7	$4 \times 5 = 20$ apples required 4 packs required $4 \times 99p = \text{£}3.96$ 20 apples requires $20 \times 18 = \text{£}3.60$ Cheaper to buy individual apples	Individual apples	M1 20 apples required or $4 \times 5 = 20$, $4 \times 99p = \text{£}3.96$ M1 $20 \times 18 = \text{£}3.60$ A1 Correct answer from correct working								
Q8a	<table border="1" style="display: inline-table; vertical-align: middle;"> <tr> <td>Owls</td> <td></td> </tr> <tr> <td>Buzzards</td> <td></td> </tr> <tr> <td>Red kites</td> <td></td> </tr> <tr> <td>Ospreys</td> <td></td> </tr> </table> <div style="display: inline-block; vertical-align: middle; margin-left: 20px; border: 1px solid black; border-radius: 10px; padding: 5px;"> Key:  = 8 birds </div>	Owls		Buzzards		Red kites		Ospreys			B1 Correct for red kites
Owls											
Buzzards											
Red kites											
Ospreys											

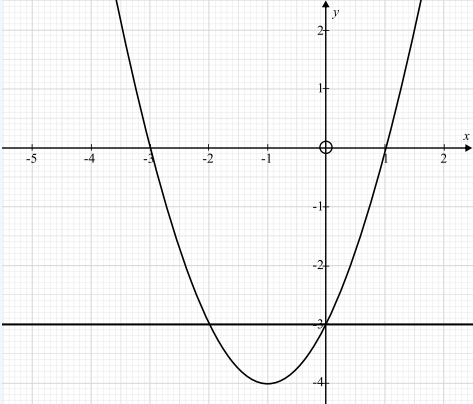
Question	Working	Answer	Notes
Q8b	$22:28 = 11:14$	11:14	M1 22 and 28 A1 Correct simplified ratio
Q8c	$\frac{10}{84} = \frac{5}{42}$	$\frac{10}{84}$	M1 10 or 84 seen A1 $\frac{10}{84}$ oe
Q9		Parallelogram	
Q10a		$\frac{2}{24}$ or any equivalent fraction	A1 Any equivalent fraction
Q10b	$\frac{1}{12} = \frac{2}{24}$ $\frac{2}{12} = \frac{4}{24}$	$\frac{3}{24}$	A1 Any fraction that is greater than $\frac{1}{12}$ and $\frac{2}{12}$
Q11a	Annie added 4 and -3 before squaring Rebecca calculated -3 squared as -9		
Q11b	$4 + (-3)^2 = 4 + 9 = 13$	13	B1 cao
Q12a	$12x - 8 = 52$ $12x = 60$ $x = 5$	$x = 5$	M1 Correctly expands brackets or divides by 4 A1 cao
Q12b	$4y + 1 = 22$ $4y = 21$ $y = 5.25$	$y = 5.25$	M1 Multiplies by 11 A1 cao

Question	Working	Answer	Notes
Q13	$24 \times 7 = 168$ $\frac{40}{84} = \frac{5}{21}$	$\frac{5}{21}$	M1 $24 \times 7 = 168$ A1 Correct, simplified fraction
Q14	$V = 6 \times 2 \times 3 = 36\text{cm}^3$	36cm^3	M1 $6 \times 2 \times 3$ A1 cao
Q15	12 pages per 20s = 36 pages per min $36 \times 8 = 288$ 11 pages per 15s = 44 pages per min $44 \times 10 = 440$ $288 + 440 = 728$	728	M1 12 pages per 20s = 36 pages per min M1 $36 \times 8 = 288$ M1 11 pages per 15s = 44 pages per min $44 \times 10 = 440$ A1 cao
Q16a			M1 Rotation 90° A1 Fully correct

Question	Working	Answer	Notes
<p>Q16b</p>			<p>M1 Enlargement scale factor 3 A1 Fully correct</p>
<p>Q17</p>	<p>2% of 125 000 = 2500 5% of 80 000 = 4000</p> <p>Total stamp duty = 2500 + 4000 = £6500 £330 000 + £6500 + £2000 = £338 500</p> <p>Yes he can afford it</p>	<p>Yes</p>	<p>M1 2% of 125 000 = 2500 M1 5% of 80 000 = 4000 M1 Total stamp duty = 2500 + 4000 = £6500 A1 Correct conclusion from correct working</p>

Question	Working	Answer	Notes																
<p>Q18</p>	<table border="1" data-bbox="286 258 833 354"> <tr> <td>x</td> <td>-2</td> <td>-1</td> <td>0</td> <td>1</td> <td>2</td> <td>3</td> <td>4</td> </tr> <tr> <td>y</td> <td>-8</td> <td>-6</td> <td>-4</td> <td>-2</td> <td>0</td> <td>2</td> <td>4</td> </tr> </table> 	x	-2	-1	0	1	2	3	4	y	-8	-6	-4	-2	0	2	4		<p>M1 At least 2 correct points plotted or stated or a line through (0, -4) or a line with gradient 2</p> <p>M1 A line through at least 3 correct points or all points plotted but not joined</p> <p>A1 cao</p>
x	-2	-1	0	1	2	3	4												
y	-8	-6	-4	-2	0	2	4												
<p>Q19a</p>	$\frac{16}{40} \times 220 = 88$	<p>88</p>	<p>M1 $\frac{16}{40}$ seen</p> <p>A1 cao</p>																

Question	Working	Answer	Notes
Q19b		We have assumed that the sample is representative of all pupils	
Q20a		41° Corresponding angles are equal	A1 41° B1 Corresponding angles are equal
Q20b		No because angles <i>DCG</i> and <i>CGH</i> are co-interior so they add up to 180°	B1 No B1 Correct explanation
Q21a		q^{12}	
Q21b		$2p^7$	M1 2 or 7 correct A1 cao
Q21c	$4 \times 3 = 12$ $2^3 = 8$	$a = 4$ $b = 8$	B1 $a = 4$ B1 $b = 8$
Q22a	$1 - 0.7 = 0.3$	0.3	
Q22b	$200 \times 0.7 = 140$	140	
Q23a		3.4×10^{-5}	
Q23b		27100	
Q23c	$\frac{3 \times 10^8}{4.5 \times 10^9} = \frac{3}{45} = \frac{1}{15}$	$\frac{1}{15}$	A1 Fully simplified fraction
Q24a	$5^2 + 8^2 = 89$ $\sqrt{89} = 9.433981132$	9.43cm	M1 $5^2 + 8^2 = 89$ A1 cao


Question	Working	Answer	Notes
Q24b	Area of semi circle: $\frac{1}{2} \times \pi \times \left(\frac{\sqrt{89}}{2}\right)^2$ $= \frac{1}{2} \times \pi \times 4.716(99\dots)^2$ $= 34.950(21827\dots)$ Area of triangle: $\frac{1}{2} \times 5 \times 8 = 20$ Shaded area: $34.950(21827\dots) - 20 = 14.950(21827\dots)$	34.95cm ²	M1 ft their radius in (a) = "9.433(981132...)" ÷ 2 M1 ft $\frac{1}{2} \times \pi \times$ their <i>r</i> squared M1 $\frac{1}{2} \times 5 \times 8 = 20$ A1 cao
Q25	$\frac{3a + 5a + 2 + 2a + 8}{3} = 120$ $10a + 10 = 360$ $10 = 350$ $a = 35$ Smallest value: $2 \times 35 + 8 = 78$	78	M1 Sets up equation or multiplies 120 by 3 A1 $a = 35$ M1 Substitutes a into at least one expression A1 cao
Q26		>	
Q27a		(-1, -4)	
Q27b		$x = -2$ and $x = 0$	M1 Line drawn at -3 or indication of reading from graph at $y = -3$ A1 Both correct solutions

Looking to improve your school's maths results without stretching your budget?

Tutoring from our spoken AI maths tutor Skye gives schools an even more affordable option for every pupil.

- ✓ 90% cheaper than other tutoring providers
- ✓ Curriculum-aligned lessons designed by qualified teachers
- ✓ Discounts available for long-term bookings and MATs

 thirdspacelearning.com

 0203 771 0095

 hello@thirdspacelearning.com

Where to go next?

For more GCSE maths revision resources and worksheets, visit the Third Space Learning [GCSE maths revision](#) pages. Or scan the QR code to discover our library of FREE GCSE maths revision resources:

